

Name: _____



Datum: _____

Sachaufgabe der Woche

Auf einer Wiese stehen 8 Hühner und 5 Schweine.

Wie viele Beine haben alle Tiere zusammen?

Löse die Aufgabe durch Zeichnen! (Tipp: Du kannst auch einfach Kreise mit „Beinen“ zeichnen)






Antwort:




A	B	C	E	F	H	I	L	N	R	S	T	U
17	25	34	42	50	64	72	80	87	93	94	95	99

$80 - 8 =$ <input type="text"/>	<input type="text"/>	$68 + 4 =$ <input type="text"/>	<input type="text"/>	$90 - 18 =$ <input type="text"/>	<input type="text"/>
$29 + 5 =$ <input type="text"/>	<input type="text"/>	$90 - 3 =$ <input type="text"/>	<input type="text"/>	$26 + 16 =$ <input type="text"/>	<input type="text"/>
$71 - 7 =$ <input type="text"/>	<input type="text"/>	$25 + 25 =$ <input type="text"/>	<input type="text"/>	$100 - 7 =$ <input type="text"/>	<input type="text"/>
$18 + 7 =$ <input type="text"/>	<input type="text"/>	$40 - 23 =$ <input type="text"/>	<input type="text"/>	$95 - 70 =$ <input type="text"/>	<input type="text"/>
$77 - 5 =$ <input type="text"/>	<input type="text"/>	$50 + 49 =$ <input type="text"/>	<input type="text"/>	$0 + 72 =$ <input type="text"/>	<input type="text"/>
$93 - 6 =$ <input type="text"/>	<input type="text"/>	$61 + 19 =$ <input type="text"/>	<input type="text"/>	$52 + 42 =$ <input type="text"/>	<input type="text"/>
$34 + 8 =$ <input type="text"/>	<input type="text"/>	$100 - 5 =$ <input type="text"/>	<input type="text"/>	$95 - 0 =$ <input type="text"/>	<input type="text"/>



. Und was



du?